



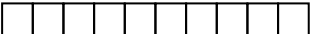

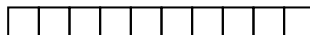

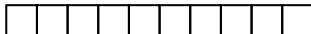

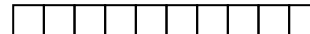

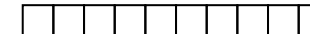
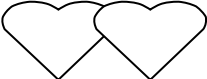





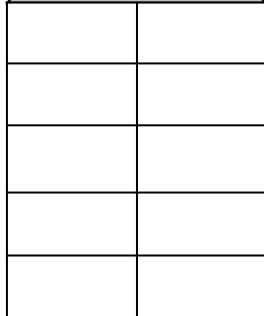
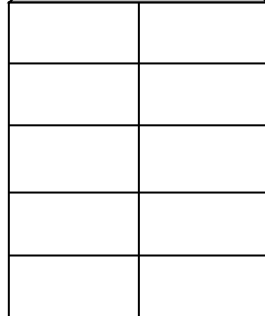
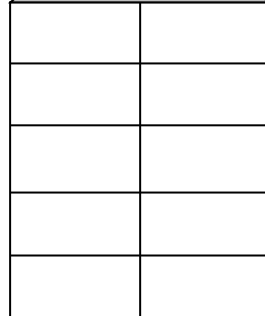
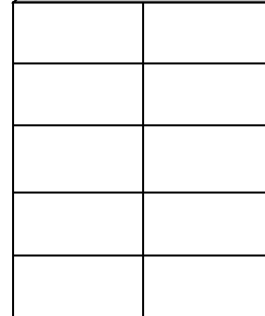

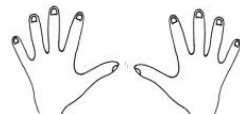
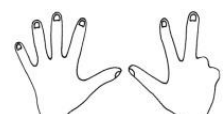



Zahlzerlegung

Finde alle Zerlegungen der Zahl 10. Lerne sie auswendig.

   $\boxed{1} + \boxed{9} = \boxed{10}$	  $\boxed{} + \boxed{} = \boxed{}$	  $\boxed{} + \boxed{} = \boxed{}$
  $\boxed{} + \boxed{} = \boxed{}$	  $\boxed{} + \boxed{} = \boxed{}$	  $\boxed{} + \boxed{} = \boxed{}$
  $\boxed{} + \boxed{} = \boxed{}$	  $\boxed{} + \boxed{} = \boxed{}$	  $\boxed{} + \boxed{} = \boxed{}$

Finde zu den Zahlen verschiedene Zerlegungen.
Deine Finger können dir dabei helfen.

4	10	8	5
			
			

Male auf die Rückseite eigene Zahlenhäuser.